

Future First Grade Students!



Summer Homework
Due: September 5, 2018

Student: _____

Parent Signature: _____

Raz-Kids - Raz-Kids.com

Username _____

Password _____

Reflex Math - Reflexmath.com

Username _____

Password _____

Think Central - www.K6.thinkcentral.com/ePC/start.do

Username _____

Password: 12345

June 2018

Dear Kindergarten Parents and Caregivers,

We thought it would be helpful to give you the first grade supply list before the new school year begins. Please send in only the supplies that are on the list. **Please write your child's name on his/her supplies.**

All students need the following supplies:

- 6 black and white composition books
- 48 sharpened pencils (preferably Ticonderoga)
- 1 safety scissor
- 3 glue sticks
- 1 bottle of Elmer's School Glue
- 1 box of crayons, 24 or less (preferably Crayola)
- 1 box of colored pencils, 12 count
- 1 coloring or activity book for lunchtime inclement weather
- 1 plastic pencil box 5" x 8"
- 1 package of dry erase markers (preferably Expo)
- 4 bottom pocket sturdy plastic folders
- 1 box of tissues
- 1 roll of paper towels
- 1 package of baby wipes

Boys only:

- 1 bottle of hand sanitizer
- 1 box gallon size Ziplock bags

Girls only:

- 1 ream of white copy paper (8"x12")
- 1 box quart size Ziplock bags

We look forward to meeting you and your child in September. Have a wonderful summer!

Sincerely,
The First Grade Teachers

Just a Reminder: Your child needs to complete the summer homework packet.

June 2018

Dear Parent(s) or Guardian(s),

To help prepare your child for first grade, we are asking your child to choose 2 fiction and 2 non-fiction books from the list below. These books can be found in the local library or book store. Your child should complete the attached worksheets, fiction and non-fiction are indicated at the top. The assignment is due on the first day of school.

Choose **2** of the **fiction** books listed below.

- The Rainbow Fish by Marcus Pfister
- Ira Sleeps Over by Bernard Waber
- Chrysanthemum by Kevin Henkes
- Lilly's Purple Plastic Purse by Kevin Henkes
- A Chair for My Mother by Vera B. Williams
- Swimmy by Leo Lionni
- A Color of His Own by Leo Lionni
- Stella Luna by Janell Cannon
- A House for Hermit Crab by Eric Carle

Choose **2** of the **non-fiction** books listed below.

- I am Planet Earth by Jean Marzollo
- I am Water by Jean Marzollo
- Why Do Leaves Change Color? by Betsy Maestro
- My Five Senses by Alike
- Are You a Ladybug? by Judy Allen
- Whales by Gail Gibbons
- What Lives in a Shell? by Kathleen Zoehfeld
- Penguin, Penguin by Margaret Hillert
- Wolves by Margaret Hillert

We look forward to meeting both you and your child in September. Have a wonderful summer.

Sincerely,
The First Grade Teachers

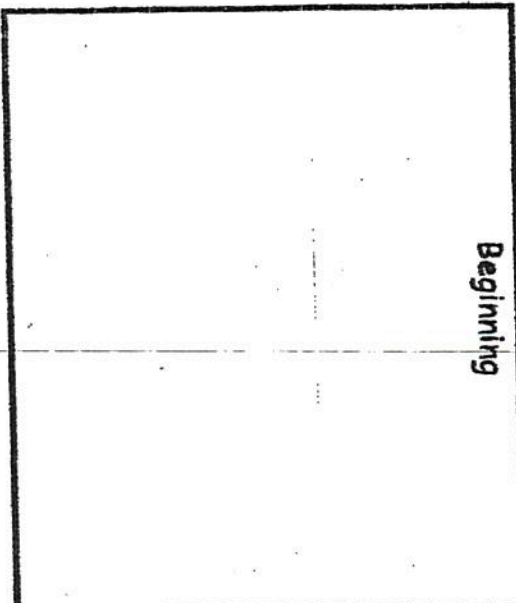


Fiction Book Response

Name _____ Date _____

Title _____

Author _____

Draw and write about what happened in the story.

Beginning	Middle	End
		

First, _____ Next, _____ Finally, _____

Name _____ Date _____

Fiction Book Response

Title: _____

Author: _____

Illustrator: _____

Characters: _____

Setting: _____

Who is your favorite character? Why? _____

Story summary: (write 3 to 5 sentences about the book).

Non-fiction Response

Name _____ Date _____

Title _____

Author _____

Draw and write what you learned from this book.

Fact 1

Fact 2

Fact 3

Non-fiction Response

Name _____ Date _____

Title _____

Author _____

Draw and write what you learned from this book.

Fact 1

Fact 2

Fact 3

Name _____

1.



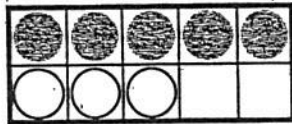
☐ $4 + 2$

☐ $5 + 2$

☐ $4 + 3$

☐ $5 + 3$

2.




☐ $7 - 3$

☐ $8 - 3$

☐ $7 - 2$

☐ $8 - 5$

3.




☐ 2

☐ 4

☐ 3

☐ 8

4.



$6 + 4 = \underline{\quad}$

☐ 10

☐ 4

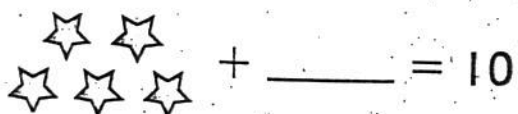
☐ 6

☐ 1

DIRECTIONS 1. There are 4 flowers in the vase. Eva puts 3 more flowers in the vase. Mark beside the addition that shows how many flowers there are now. 2. Jamie has 8 counters. 3 counters are white. Mark beside the subtraction that shows how many counters are gray. 3. There are 6 frogs at a pond. 2 hop away. How many frogs are left? Mark beside the number. 4. There are 4 ducks at the pond. 6 ducks join them. How many ducks are there altogether? Mark beside the number.

GO ON

5.

☐ 6☐ 4☐ 5☐ 3

6.

$9 + \underline{\hspace{2cm}} = 10$

☐ 3☐ 1☐ 2☐ 0

7.

71	72	73	74	75	76	77	78	79	80
81	82	83	84	85	86	87	88	89	90
91	92	93	94	95	96	97	98	99	—

☐ 100☐ 89☐ 90☐ 80

8.

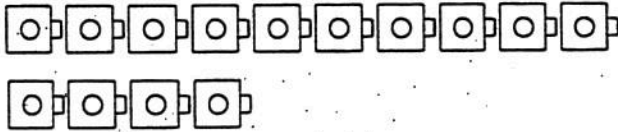
☐ 20☐ 18☐ 19☐ 17

DIRECTIONS 5. Count the stars. How many more stars are needed to make 10? Mark beside the number. 6. What number is being added to the set? Mark beside the number. 7. Point to the numbers as you count. Mark beside the number that completes the counting order. 8. Count the baseballs. Mark beside the number that shows how many.

GO ON 

Name _____

9.



☐ 5

☐ 15

☐ 14

☐ 24

10.

5

☐ 7

☐ 3

☐ 4

☐ 1

11.

7

☐ 2

☐ 9

☐ 7

☐ 10

12.



☐ $5 = 1 + 4$

☐ $3 = 2 + 1$

☐ $5 = 3 + 2$

☐ $4 = 3 + 1$

DIRECTIONS 9. Count the cubes. Mark beside the number that shows how many. 10. Mark beside the number that is greater than the number at the beginning of the row. 11. Mark beside the number that is less than the number at the beginning of the row. 12. Mark beside the addition sentence that shows the number pair that matches the picture.

GO ON

Name _____

13.



☐



☐



☐



☐

14.



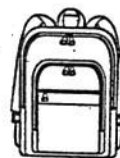
☐



☐

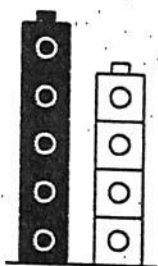


☐

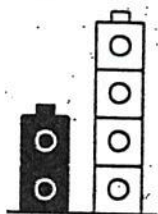


☐


15.




☐



☐

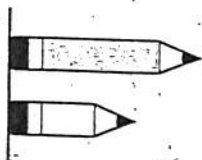


☐

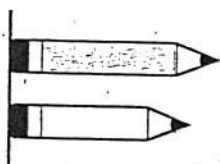


☐

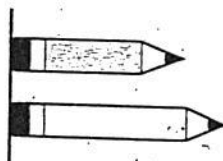
16.



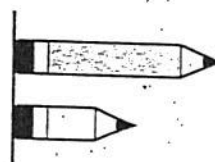
☐



☐



☐




☐

DIRECTIONS 13. Which tree is taller? Mark below the picture. 14. Mark below the object that is lighter than a book. 15. Mark under the set that shows that the gray cube tower is shorter than the white cube tower. 16. Mark below the set that shows that the gray pencil is shorter than the white pencil.

GO ON 

Name _____

17.




☐ 5

☐ 3


☐ 4

☐ 2


18.



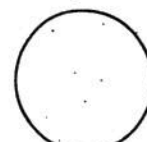
☐



☐




☐




☐

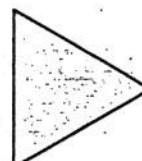
19.




☐



☐

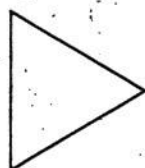


☐



☐

20.



☐ 2

☐ 4

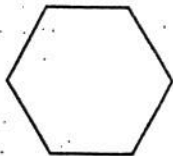
☐ 3

☐ 5

DIRECTIONS 17. How many sides does a square have? Mark beside the number. 18. Mark under the shape that does not belong. 19. Mark under the size shape that does not belong. 20. Mark beside the number that shows how many corners or vertices the triangle has.

Name _____


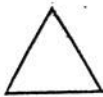
21.

☐ 10☐ 8☐ 9☐ 6

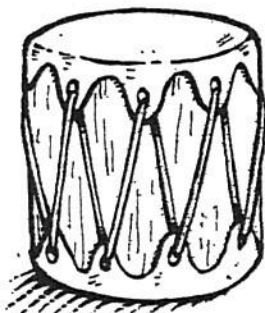

22.

☐☐☐☐

23.

☐☐☐☐

24.

☐☐☐☐

DIRECTIONS 21. Mark beside the number that shows how many corners or vertices the hexagon has. 22. Mark under the set that shows a cube beside a cylinder. 23. Mark below the triangle. 24. Mark beside the shape that is the same shape as the drum.

